



POLE STAR PUBLIC SCHOOL

Sector-7 (Extn.) Gurugram (HR.)

WINTER HOLIDAY'S HOMEWORK

SESSION: 2024-2025

CLASS – III



Winter vacation is a time to relax and celebrate the time in the company of your family, friends and celebrate New Year with your family. During the winter season, everyone enjoys sweets, cakes, and delicious dishes made by your mother.

Please take note of the following suggestions:

- Encourage your child to converse in English.
- Encourage your child to watch informative program on television.
- Help them revise all the concepts done so far.
- Parents are requested to only guide their children while doing their Sample Paper.

POLE STAR PUBLIC SCHOOL
SECTOR-7 EXTN.GURUGRAM, HARYANA
SAMPLE PAPER (2024-2025)

Class- III
M.M- 80

Subject- English
Time-3 Hours

GENERAL INSTRUCTIONS

- This paper is divided into three sections: A, B and C. All questions are compulsory.
- Separate instructions are given with each section and question wherever necessary. Read these instructions very carefully and follow them.
- Do not exceed the prescribed word limit while answering the questions.

SECTION- A (READING)

1. Read the following passage and answer the questions. (10)

A picnic is super fun. It is an outdoor party with family and friends. Everyone brings yummy food in baskets. We all sit on mats on the grass. There is lots of laughter. We play games like tag or catch, Hide and Seek etc. We enjoy the fresh air and eat tasty sandwiches and fruits. It feels like a mini adventure. We make happy memories together. Picnics are like magical breaks. We can relax and eat. We have a great time outside.

Answer the following questions.

- a) What do people do during a picnic?
- b) Where do people sit during a picnic?
- c) Name one game mentioned in the passage that people play during a picnic.
- d) How does the passage describe the atmosphere during a picnic?

True/False Questions:

- e) People watch TV during a picnic. (True/False)
- f) Picnics are described as fun. (True/False)

Complete the sentence.

- g) It feels like a mini _____.
- h) We make _____ memories together.
- i) Write the Antonym from the passage.
stand
- j) Write any two nouns from the passage.

2. Read the following passages and answer the questions. (10)

A dictionary is like a helper for words. My uncle gave me a dictionary on my last birthday. It was a surprise gift for me. It is a treasure chest full of meanings. It teaches how to say words, and where to use them. When we read or write, a dictionary helps us to understand and use words correctly. It's our language friend. So, when I have a question about a word, just open my dictionary, and it will tell me everything I need to know. It's like having a language helper. It is always ready to help you.

Answer the following questions.

- a) What is a dictionary like for words?
- b) Who gave the narrator a dictionary on their last birthday?
- c) How does the passage describe a dictionary?
- d) When does the narrator use a dictionary?
True/False
- e) A dictionary is described as a language helper in the passage.(True/False)
Complete the sentences
- f) The narrator got a dictionary as a _____
- g) It is our _____ Friend.
- h) It is a _____ chest Full of meanings.
- i) Write the Antonym from the given Passage.
First

j) Write two nouns from the passage.

SECTION-B (WRITING & GRAMMAR)

3. Fill in the blanks with the correct conjunction given in bracket. (2)

- a) Arjun went to the shop _____ bought two chocolates.(but/and)
b) Manisha takes a train _____ a bus to office.(but/or)

4. Underline the preposition in this paragraph. (2)

Vijay has gone for a stroll in the park. Ajay is sitting on a bench near the trees. Anita's friend standing near a bench.

5. Punctuate these sentences. (4)

- a) sita, geeta and sangeeta are good friends
b) his father's name is ramesh
c) what are your hobbies
d) i have a maths test tomorrow

6. Fill in the blanks by using the Simple Present Tense form of verbs given in brackets. (2)

- a) My father and I _____ tennis every morning.(play)
b) The teacher _____ the parents today.(meet)

7. Fill in the blanks by using the simple past tense form of verbs given in brackets. (2)

- a) I _____ with her to the fair. (go)
b) Tarun _____ a story about a family.(write)

8. Fill in the blanks by with the form of verbs given in brackets. (2)

- a) I _____you with your work tomorrow.(help)
b) My room is dirty. I _____ it tomorrow(clean)

9. Write the synonyms of these words. (2)

- a) smell b) scare c) below d) mistake

10. Write the antonyms of these words. (2)

- a) exit b) fast c) silly d) rough

11. Circle the correct adverbs in these sentences. (2)

- a) I have completed my task(quickly/ clearly)
b) The car's engine started (noisily/ calmly)

12. Look at the picture given below and describe it in your own words (80 words) (5)



13. Write a paragraph of 5 sentence about “ Republic Day or My New Bicycle ”. (5)

14. Write a letter to your grandmother to tell her about the medal you won at the creative writing competition. (5)

SECTION – C (LITERATURE)

15. Write down the meaning of following words: (5)
a) shed b) confusion c) opponents d) bitterly e) boasted

16. Fill in the blanks using words from the box. (2)

Amazing, Lord Krishna, cat, forest, village

- a) Gopala's cowherd brother was actually _____
- b) Lions belong to the _____ family.
- c) The Sphinx was _____ creature.
- d) Gopala lived with his mother in a _____

17. Frame Sentences. (Any 3) (3)
a) amazing b) surprised c) feast d) clever

18. Read the extract given below and answer your question. (5)
" Boys and girls Banners and fans."

- a) From which poem are these lines taken?
- b) Where are the boys, girls, the banners and fans?
- c) What game is being played there?
- d) How many players are there?
- e) How did the fans show their happiness?

19. Answer the following questions: (Do any 5) (2x5)

- a) What riddle did the Sphinx ask the travellers?
- b) What do you do when you feel sad and want to cry?
- c) What did Gopala take to school for the feast?
- d) Why the children can't land on the sun?
- e) Why did the king want the two giant's to be killed?
- f) How does a lion spend most of its day?

पोल स्टार पब्लिक स्कूल सेक्टर 7
एक्सटेंशन गुरुग्राम (हरियाणा)

कक्षा - तीसरी

अधिन्यास परीक्षा (2024-2025)

विषय - हिंदी

कुल अंक - 80

समय : 3 घंटे

सामान्य निर्देश:

1. सभी प्रश्नों के उत्तर देना अनिवार्य है।
2. लेख सुंदर व स्पष्ट लिखे।

(खंड - क) (अपठित गद्यांश)

1. गद्यांशों को पढ़कर पूछे गए प्रश्नों के उत्तर दीजिए।

(10)

(i) समय बहुत बलवान होता है। हमें अपना हर काम निश्चित समय पर करना चाहिए, तभी अपने जीवन में सफलता प्राप्त कर सकते हैं। जो लोग समय - तालिका बनाकर उसके अनुसार ही चलते हैं, उनके पास समय की कमी कभी नहीं रहती। ऐसे लोग सभी कामों के लिए समय निकाल लेते हैं। समय ईश्वर का दिया हुआ अनमोल उपहार है। हमें समय का सदुपयोग करना चाहिए। इससे मन में अच्छे विचार आते हैं, और जीवन में सफलता मिलती है।

(क) गद्यांश में किसे बलवान कहा गया है?

(ख) निश्चित समय पर काम करने से क्या लाभ है?

(ग) समय की कमी किसके पास नहीं होती है?

(घ) ईश्वर ने हमें कौन सा अनमोल उपहार दिया है?

(ङ) गद्यांश में से छांटकर दिए गए शब्दों के विलोम शब्द लिखिए।

असफलता, दूर

(ii) एक तालाब में एक मेंढक रहता था। उस तालाब का पानी दिन पर दिन सूखता चला जा रहा था। मेंढक को चिंता होने लगी कि यदि सारा पानी सूख गया तो उसका क्या होगा। उसी तालाब के पास एक पेड़ पर मेंढक का मित्र कौआ रहता था। उसने अपनी चिंता अपने मित्र कौआ को बताई। उसे सुझाव दिया कि पास ही एक बड़ा तालाब है वह वहां जाकर रह सकता है।

(क) मेंढक कहां रहता था?

(ख) मेंढक को चिंता क्यों होने लगी?

(ग) पेड़ पर कौन रहता था?

(घ) मेंढक ने अपनी चिंता किसे बताई?

(ङ) मेंढक को उसके मित्र ने क्या सलाह दी?

खंड - ख (व्याकरण)

2. नीचे दिए गए वाक्यों में से विशेषण शब्दों को पहचान कर लिखिए।

(4)

(क) बगीचे में लाल गुलाब हैं।

(ख) मोहित ने गरम दूध पिया।

(ग) रोहित ने नई साइकिल खरीदी।

(घ) मोटा आदमी स्वस्थ नहीं रहता।

3. दिए गए शब्दों में से सर्वनाम शब्द छांट कर लिखिए।

(2)

(क) यह मोहन का घर है।

(ख) इस घड़े में क्या है?

(ग) तुम कहां जा रहे हो?

(घ) यह मेरा स्कूल है।

4. दिए गए अनेक शब्दों के लिए एक शब्द लिखिए।

(4)

(क) जो पढ़ाता है

(ख) जो मिठाई बनाएं

(ग) जो कभी न मरे

(घ) काम से जी चुराने वाला

5. संयुक्त अक्षर / द्वितीय व्यंजन वाले शब्द लिखकर वाक्य पूरे कीजिए।

(4)

(बच्चा, चक्की, सब्जियां, कच्चा)

(क) मेरा घर----- है।

(ख) -----में गेहूं पीसा जाता है।

(ग) हमें हरी ----- खानी चाहिए।

(घ) छोटा-----खेल रहा है।

6. दिए गए वाक्यों में से क्रिया शब्द छांटकर लिखिए ।

(4)

(क) सुरभि खाना खाती है।

(ख) मोर नाचता है।

(ग) पिताजी अखबार पढ़ रहे हैं।

(घ) परी साइकिल चला रही है।

7. नीचे दिए गए शब्दों के शुद्ध रूप लिखिए।

(2)

रीति, प्रमान, प्रथक, परकाश

8. मुहावरों के सही अर्थ पर निशान लगाइए-

(2)

(क) अंधे की लकड़ी-

(i) इकलौता पुत्र

(ii) एकमात्र सहारा

(iii) बहुत प्यार

(ख) नौ दो ग्यारह होना-

(i) भाग जाना

(ii) बहुत ही दौड़ना

(iii) जमा करना

9. रिक्त स्थानों की पूर्ति कीजिए।

(3)

(भूमि, बगीचा, पुष्प, घन, समुद्र)

(क) सागर को-----भी कहते हैं।

(ख) उपवन को ----- भी कहा जाता है।

(ग) बादल को ----- भी कहते हैं।

खंड - ग (साहित्य)

10 शब्दार्थ लिखो ।

(5)

साहसी, गर्व, यत्न, निर्भय, निपुणता

11. वाक्य बनाओ।

(5)

व्यापारी, आशीर्वाद, सम्मान, अचानक, प्रसन्न

12. निम्नलिखित प्रश्नों के उत्तर दीजिए-

(10)

- (क) बचपन में ही रणजीत सिंह की आंख की रोशनी कैसे चली गई?
(ख) पृथ्वी के बारे में धर्म ग्रंथों का क्या कहना था?
(ग) दो भक्तों को किसने, क्या दिया ?
(घ) पांडु के पुत्र क्या कहलाते थे?
(ङ) मंगम्मा कहां रहती है ?

13. स्थान की पूर्ति

(5)

- (क) मंगम्मा की मां को----- प्रिय है।
(ख) खिलौने के विषय-----कथाओं के पात्र होते हैं ।
(ग) खिलौने बनाने के लिए -----लकड़ी का प्रयोग होता है।
(घ) तिरुपति मंदिर-----पहाड़ी पर स्थित है।
(ङ) मंगम्मा के परिवार में ----- भाषा बोली जाती है।

14 गद्यांश को पढ़कर पूछे गए प्रश्नों के उत्तर दीजिए।

(5)

एक दिन उसे ब्राह्मण के पुत्र की बारी गाड़ी लेकर राक्षस के पास जाने की आई। रात भर ब्राह्मण और ब्राह्मणी रोते रहे। पूछने पर उन्होंने बताया, " आज हमारा पुत्र राक्षस की भेंट चढ़ जाएगा। वह मारकर उसे खा जाएगा। हम क्या करें।"

- (क) 'उसे ब्राह्मण' से किसकी ओर संकेत है?
(ख) कौन सी गाड़ी की बात की गई है?
(ग) ब्राह्मण और ब्राह्मणी क्यों रो रहे थे?
(घ) ब्राह्मण का पुत्र किसकी भेंट चढ़ जाएगा?
(ङ) रात तथा कल शब्दों के विलोम शब्द लिखिए।

खंड - घ (रचनात्मक लेखन)

15. किसी पालतू जानवर अथवा स्वतंत्रता दिवस पर 5 पंक्तियां लिखिए।

(5)

16 अवकाश लेने हेतु प्रधानाचार्य को प्रार्थना - पत्र लिखिए।

(5)

17. चित्र देखकर 5 पंक्तियां लिखिए।

(5)



POLE STAR PUBLIC SCHOOL
SECTOR-7 EXTN.GURUGRAM, HARYANA
SAMPLE PAPER (2024-2025)

Class- III
M.M- 80

Subject- Maths
Time -3 Hours

General Instructions:

- Read the question paper carefully.
- Write neatly and legibly.
- Do not overwrite. Pay special attention to spellings.
- Read the answer before submitting the answer paper.

SECTION - A

1. Multiple choice questions.

(10X1=10)

- a) What is half of 4?
i. 1 ii. 2 iii. 3 iv. 4
- b) The unit fraction $\frac{1}{2}, \frac{2}{2}, \frac{3}{2}, \frac{4}{2}$
i. $\frac{1}{2}$ ii. $\frac{2}{2}$ iii. $\frac{3}{2}$ iv. $\frac{4}{2}$
- c) Conversion 593 paise into rupees and paise.
i. ₹ 593 ii. ₹ 5.93 iii. ₹ 5.39 iv. None of these
- d) July and August have _____ days each.
i. 29 ii. 28 iii. 31 iv. 30
- e) Quarter of an hour is:
i. 60 minutes ii. 45 minutes iii. 30 minutes iv. 15 minutes
- f) Which is the shortest distance?
i. 100m ii. 5km iii. 5000cm iv. 5000m
- g) Which is the fifth month of the year?
i. July ii. May iii. April iv. June
- h) Half hour = _____ minutes.
i. 30 ii. 15 iii. 10 iv. 60
- i) $70m + 16m$
i. 86 ii. 86m iii. 80 iv. 75
- j) Capacity of a bag can be_____.
i. 5kg ii. 5L iii. 20L iv. 500ML

2. Fill in the blanks.

(10X1=10)

- a) $80 \div 10 =$ _____.
- b) ₹ 1 = _____ p.
- c) 1 hour = _____minutes.
- d) 1 year = _____months.
- e) At 6:35 a.m. the hour hand is at _____.
- f) 1km = _____m.
- g) Subtract 75 kg 29g from 90 kg 522 g _____.
- h) 8051 g change into kilogram and gram _____.
- i) $\frac{14}{3}$ convert into mixed fraction _____.
- j) Find the length of line segment AB

A _____ B

SECTION - B

3. Solve the following questions.

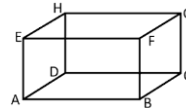
(10X2=20)

- a) How many line segments are required to make these alphabet **A**?
- b) Divide 854.63 by 7.
- c) The cost of 4 ice creams is ₹96.20. Find the cost of each ice cream.
- d) Compare $\frac{3}{10}$ $\frac{5}{10}$
- e) What is time 2 hours after 5:00
- f) Manju spent ₹ 25.50 at a fair and Pooja spent ₹ 23.25. Who spent more money how much?
- g) Convert 350cm into metres.
- h) I went for shopping at 4:00 p.m. and came back at 8:00 p.m. How much time did I spend for shopping?
- i) Draw the clock and write the time 7: 15 evening using a.m. and p.m.
- j) Add : 56kg 350 g, 41 kg 610 g and 7 kg 26 g

4. Solve the following questions. (Do any eight)

(8X3=24)

- a) Add : ₹ 119.35 + ₹ 45.78
- b) Multiply : ₹ 5.73 × 7
- c) Salman bought a radio for ₹ 300.20, an electric press for ₹ 172.15 and a heater for 90.60. How much money did she spend in all these items?
- d) Divide 648 ÷ 4 by using long division method.



- a) Count the number of line segments in each of the figures
- b) Convert 5L 425 ML into millilitres.
- g) Write the time shown.



- i) Tara has 12 balloons. Arti has 72 balloons. Who has more balloons? How many more?
- h)

JANUARY						
S	M	T	W	T	F	S
		1	2	3	4	5
6	7	8	9	10	11	12
13	14	15	16	17	18	19
20	21	22	23	24	25	26
27	28	29	30	31		

- 1. How many days are in January? _____
- 2. What day of the week is January 17? _____
- 3. What day of the week is January 29? _____
- 4. How many Mondays are in January? _____

SECTION – D

5. Solve the following problems. (Do any four)

(4X4=16)

- a) A shopkeeper had 70 m of silk cloth. He sold 28 m 50 cm to one customer and 35 m 85 cm to another customer. How much silk is left with him?
- b) A lunch box cost of ₹323.12 paise. What is the cost of 4 lunch box.
- c) Twinkle spent ₹195.00 at a restaurant. She also had to pay a service charge of ₹19.50. How much did Twinkle have to pay?
- d) Subtract $\frac{5}{7}$ from $\frac{10}{7}$
- e) I have of 2 tables is ₹ 366.66. Find the cost of 1 table.

POLE STAR PUBLIC SCHOOL
SECTOR-7 EXTN.GURUGRAM, HARYANA
SAMPLE PAPER (2024-2025)

Class- III
M.M- 80

Subject- Science
Time -3 Hours

General Instructions:

- Read the question paper carefully.
- Write neatly and legibly.
- Do not overwrite. Pay special attention to spellings.
- Read the answer before submitting the answer paper.

SECTION - A

1. Multiple choice questions

(0.5X5=2.5)

- | | | | |
|--|------------|------------------|------------------|
| a) This animal lives in soil | | | |
| i. Tiger | ii. Snail | iii. Lion | iv. Bear |
| b) When water is frozen, it becomes | | | |
| i. ice | ii. steam | iii.both of them | iv.none of these |
| c) Length can be measured using | | | |
| i. a thermometer | ii.ruler | iii. litres | iv. kilograms |
| d) Main source of light on Earth | | | |
| i. Sun | ii.Tube | iii.Bulb | iv.candle |
| e) This season is called the season of festivals | | | |
| i. Summer | ii. autumn | iii.winter | iv.spring |
| ii. | | | |

2. Write true or false for the following statements:

(0.5X5=2.5)

- a) We have a long shadow in the afternoon.
- b) Loamy soil is non-sticky
- c) Time is measured in hours, minutes and seconds
- d) Capacity of a container is the amount of liquid it can hold.
- e) People who go into space are called astronauts.

3. Fill in the blanks:

(5X1=5)

- a) _____ are called group of stars.
- b) Monsoon seasons is also called the _____ season.
- c) 1 km = _____ m
- d) Matter has _____ and it occupies _____.
- e) Many trees shed their leaves in the _____ season.

4. Give two examples for the following:

(5X1=5)

- a) Movements of the Earth _____, _____
- b) Weather conditions _____, _____
- c) Two types of forces _____, _____
- d) Name two liquids _____, _____
- e) Effects of force _____, _____

5. Give one word for the following:

(5X1=5)

- a) Liquids have a fixed volume but they do not have a _____.
- b) _____ of a container is the amount of liquid it can hold.

- c) Loud and unpleasant sound is called a _____.
- d) _____ is the condition of atmosphere at a given time.
- e) People who go into space are called _____.

6. Define the following:

(5X1=5)

- a) Rotation
- b) Friction
- c) Standard Unit
- d) Silt
- e) Capacity

SECTION - B

7. Answer the following questions:

(2x6=12)

- a) What are the components of soil?
- b) What are the three gases present in the air?
- c) What are the two types of thermometers?
- d) How are shadows formed?
- e) What is weather?
- f) Define revolution.

8. Answer the following questions:

(3x6=18)

- a) What are the components of soil?
- b) Write any two differences between liquids and solids.
- c) What are the different types of forces?
- d) Explain the phases of the moon.
- e) What are inner planets?
- f) What is rotation?

9. Answer the following questions:

(4X3=12)

- a) What is shadow? When do objects form shadows?
- b) Find the difference between Evaporation and Condensation.
- c) Name four main seasons and write one sentence on each.

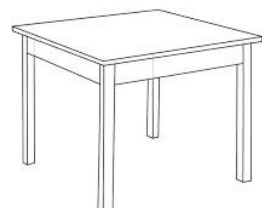

SECTION - C

10. Draw the diagram of Revolution of the Earth.

(5)

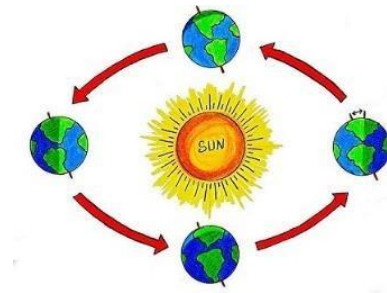
11. Look at the following objects given below categorize them into luminous

(6)



12. Look at the given picture given along side and answer the following questions.

(2)



- a) Which movement of the Earth is shown here?
- b) What is the fixed path of the Earth called?

POLE STAR PUBLIC SCHOOL
SECTOR-7 EXTN.GURUGRAM, HARYANA
SAMPLE PAPER (2024-2025)

Class- III

**Subject- Social
Science**
Time -3 Hours

M.M- 80

General Instructions:

- Read the question paper carefully.
- Write neatly and legibly.
- Do not overwrite. Pay special attention to spellings.
- Read the answer before submitting the answer paper.

SECTION - A

1. Multiple choice questions

(1X5=5)

- a) Which of the following is the cheapest means of communication ?
i. Post Card ii. Letter iii. Envelope iv. Telegram
- b) Who among the following maintain law and order?
i. Postman ii. Teacher iii. Policeman iv. Doctor
- c) Delhi is situated on the bank of river?
i. Ganga ii. Yamuna iii. Mahandi iv. Tapti
- d) The Gateway of India is located in the city of ?
i. Chennai ii. Mumbai iii. Kolkata iv. Delhi
- e) Which of the following temples in Chennai?
i. Birla ii. Kapaleeswarar iii. Lotus Temple iv. Golden Temple

2. Write true or false

(1x5=5)

- a) Veterinary doctors treat sick people.
b) Mumbai is known for its film industries.
c) Chennai is on the western coast of India.
d) The Howrah bridge was built after independence of India.
e) The Mughal garden is in parliament.

3 Fill in the blanks.

(1X5=5)

- a) Mumbai is called the _____ capital of India.
b) The old churches of Chennai were built by _____.
c) Bengali _____ is famous worldwide.
d) Lal quila was built by the emperor _____.
e) Computer and Internet provide us _____.

4. Give two examples for the following:

(5X1=5)

- a) Land transport _____, _____

- b) Water transport _____, _____
- c) Air transport _____, _____
- d) Personal communication _____, _____
- e) Mass Communication _____, _____

5. Give one word for the following:

(1x5=5)

- a) New Delhi became the capital of India in _____
- b) A person who delivers the letter from door to door _____
- c) A person who is in charge of a police station _____
- d) Which animal is known as 'Ship of Desert'? _____
- e) Which state is famous for its cotton textiles? _____

7. Name any two food items of

(1x3=3)

- a) Mumbai _____, _____
- b) Chennai _____, _____
- c) Kolkata _____, _____

SECTION – B

8. Answer the following questions:

(2x6=12)

- a) Who is the head of a police station?
- b) What was the old name of Tamil Nadu?
- c) Name two bridges built on Hugli.
- d) Name two monuments built by the emperor Shah Jahan.
- e) Which is the highest court of India?
- f) Name two seaports in India.

9. Answer the following questions:

(3x6=18)

- a) What do people of Kolkata wear?
- b) What is the use of PIN code?
- c) Who treats the sick animals?
- d) How is a News paper more useful?
- e) What is a transport and write transport names?
- f) What is mass communication? Name two means of mass communication.

10. Answer the following questions:




(4x4=16)

- a) Where are the Elephanta caves? What are these caves famous for?
- b) When did New Delhi become the capital of India? What was its previous capital?
- c) Where is Rashtrapati Bhavan situated and who lives in it?
- d) Name two vehicles that run on fuel and two vehicles that do not need fuel to run.

SECTION-C


11. Observe the picture and write names of following places.

(3)



12. Write the names of festivals being celebrated in these pictures.

(3)



DRAWING

Yarn Activity, Stone Craft, Page No. 22,38